





Nombre:

Fecha:

Coloca una ficha de dominó sobre cada forma y resuelve las sumas.




+ =




+ =




+ =



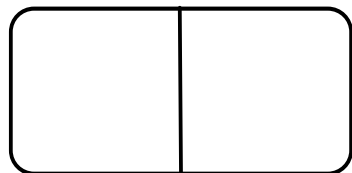
+ =



+ =



+ =



+ =



+ =



+ =



Nombre:

Fecha:

Busca una ficha, suma los puntos y apárcala en su hueco.



1

2

3

4

5

6



7

8

9

10

11

12